
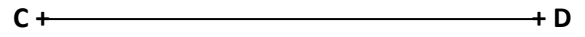


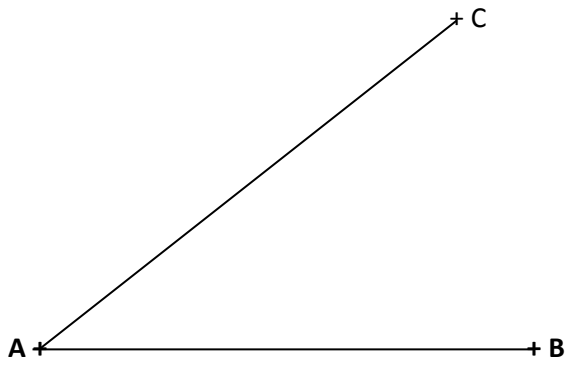
Divide the line AB into two equal divisions.




Divide the line CD into seven two equal divisions.



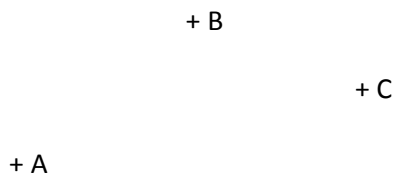
Divide the angle BAC into two equal divisions.




Divide the right angle into 15° divisions.



Construct a circle through three points



Locate the center of the circle



4

Drawn by		ENGINEERING GRAPHICS	UNIVERSITY OF GAZIANTEP MECH. ENG. DEPT.	
Date				
Control			Drawing No	
Scale				